



# Time Signatures - $\frac{3}{4}$

 In  $\frac{3}{4}$  time there are three beats in each measure.  
 The quarter note gets one beat.

Rhythmic values  $\left[ \begin{array}{l} \text{A quarter note } (\text{♩}) = 1 \text{ beat} \\ \text{A half note } (\text{♩}) = 2 \text{ beats} \\ \text{A dotted half note } (\text{♩.}) = 3 \text{ beats} \end{array} \right.$

The dotted half note gets three beats.  $\text{♩.} = 3 \text{ beats}$

1. Clap the rhythm while counting the beats out loud.


$\frac{3}{4}$    
 1 2 3    1 2 3    1 2 3    1 2 3    1 2 3

2. Write the count below the notes and then clap the rhythm while counting the beats out loud.


$\frac{3}{4}$    
 \_\_\_\_\_

3. Write a  $\frac{3}{4}$  time signature after the clef sign.

Write the count below the notes and then clap the rhythm while counting the beats out loud.

  
 \_\_\_\_\_

4. Write a  $\frac{3}{4}$  time signature after the clef sign. Write in the count below the notes. Draw the missing bar lines.

  
 \_\_\_\_\_

5. Write in the count below the notes and add the missing barlines.

$\frac{3}{4}$    
 \_\_\_\_\_